

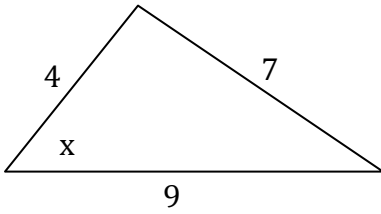
Name: _____

Date: _____

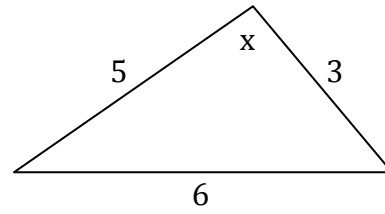
Mixed Practice: Law of Sines and Law of Cosines

In each of the following problems, use the law of sines or the law of cosines to find the unknown quantity labeled x . If x is an angle, find it in degrees. Round to the nearest thousandth. You must show correct work.

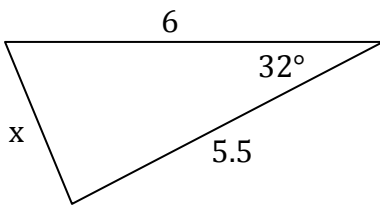
1.



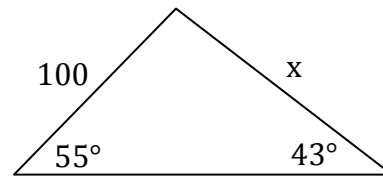
4.



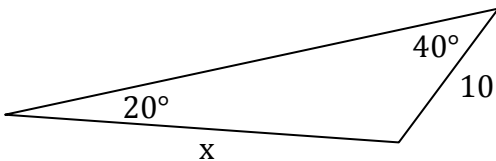
2.



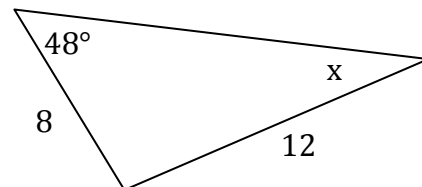
5.



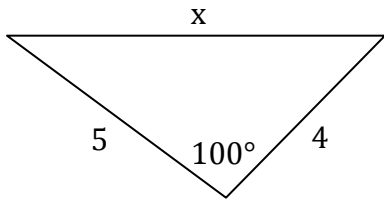
3.



6.



7.



8.

