

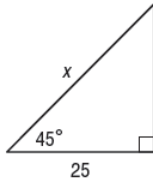
Name:

Date:

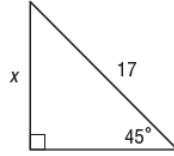
Special Right Triangles Homework

Find x .

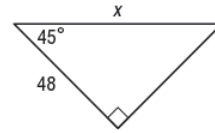
1.



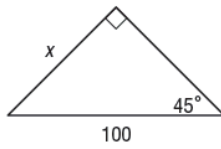
2.



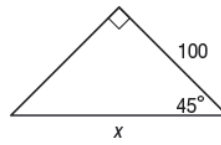
3.



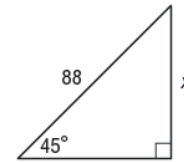
4.



5.

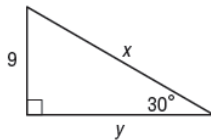


6.

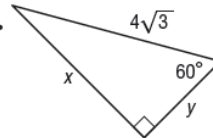


Find x and y .

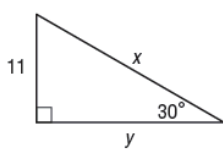
7.



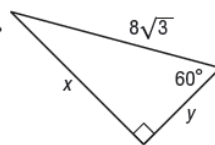
8.



9.



10.



11.

