

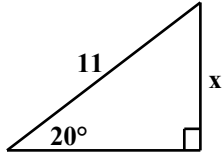
Name: _____

Period: _____

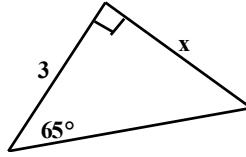
Geometry
In-class Trig Function Practice

Solve for x . You must show all work to receive credit.

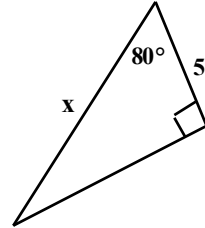
1)



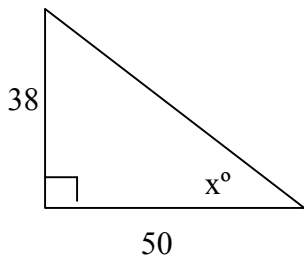
2)



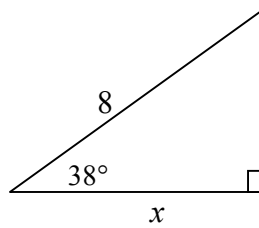
3)



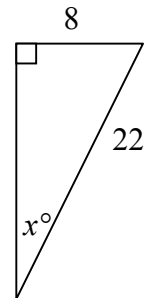
4)



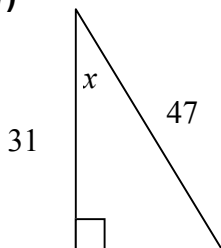
5)



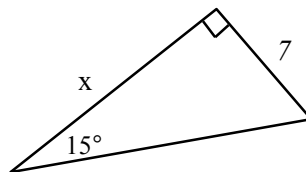
6)



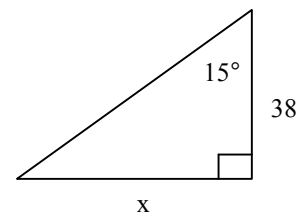
7)



8)



9)



Complete p. 246 #31 – 33 on the back of this worksheet.